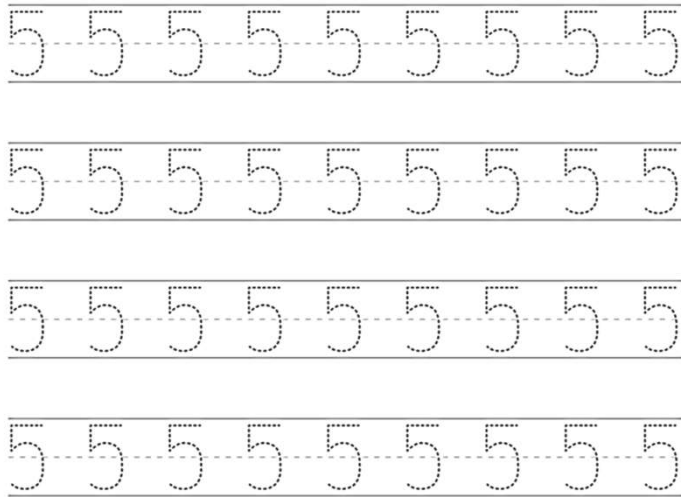



Le chiffre cinq.



Recopie le chiffre 5 (cinq).



Colorie les chiffres 5.



Le chiffre cinq.

$1 + 2 =$
 $6 \times 5 =$
 $8 - 5 =$

Effectue les opérations jusqu'à 5.



Complète la maison de cinq.

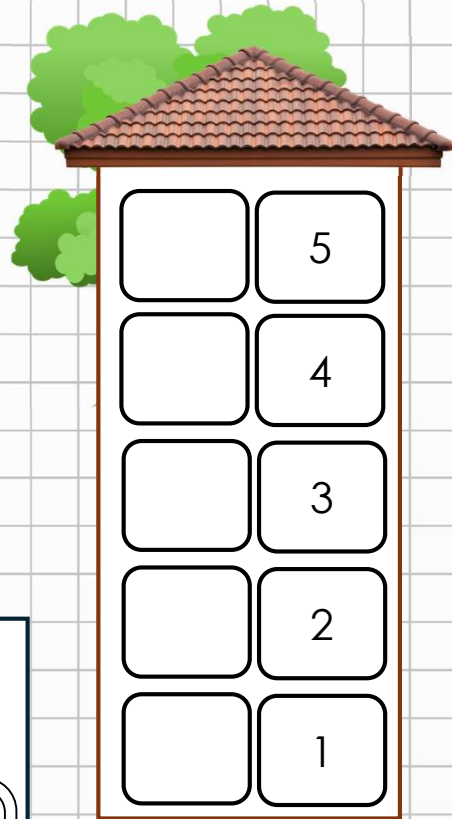
$5 + \dots = 5$

$3 + \dots = 5$

$\dots + 2 = 5$

$1 + \dots = 5$

$4 + \dots = 5$




Dessine pour faire 5 (cinq).

Three addition problems for drawing:

- Two boxes, each containing 2 beach balls, with a plus sign between them. An empty box to the right is for the answer, with a '5' written below it.
- Two boxes, each containing 1 beach ball, with a plus sign between them. An empty box to the right is for the answer, with a '5' written below it.
- Two boxes, each containing 3 beach balls, with a plus sign between them. An empty box to the right is for the answer, with a '5' written below it.



Colorie 5 cibles (cinq).





Corrections

Le fichier **correction** est réservé au membre
ABO Pro via notre site web.

Chemindesmaths.com