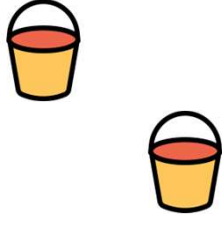



# Je compte jusqu'à 10



**Dessine** les images manquantes.







2

+

4

=






5

+=


8

1 + 2 =  
6 x 5 =  
8 - 5 =


**Calcule** les opérations suivantes.




+




=




+




=




+




=




+




=




+



=



+



=

2	+	3	=	
5	+	2	=	
3	+	3	=	
5	+	1	=	
6	+	1	=	
3	+	2	=	
7	+	2	=	

2	+	3	=	
9	+	0	=	
6	+	2	=	
8	+	1	=	
1	+	7	=	
3	+	5	=	
4	+	3	=	



## Corrections

Le fichier **correction** est réservé au membre **ABO Pro** via notre site web.

Chemindesmaths.com

10 points sur 10

Dessine les images manquantes.

	+		=	
--	---	--	---	--

	+		=	
--	---	--	---	--

Calcule les opérations suivantes.

	+		=	
	+		=	
	+		=	

	+		=	
	+		=	
	+		=	

<del>2</del>	+	<del>3</del>	=	<del>5</del>
<del>5</del>	+	<del>2</del>	=	<del>7</del>
<del>3</del>	+	<del>3</del>	=	<del>6</del>
<del>5</del>	+	<del>1</del>	=	<del>6</del>
<del>6</del>	+	<del>1</del>	=	<del>7</del>
<del>3</del>	+	<del>2</del>	=	<del>5</del>
<del>1</del>	+	<del>2</del>	=	<del>3</del>

<del>2</del>	+	<del>3</del>	=	<del>5</del>
<del>9</del>	+	<del>0</del>	=	<del>9</del>
<del>4</del>	+	<del>2</del>	=	<del>6</del>
<del>8</del>	+	<del>1</del>	=	<del>9</del>
<del>1</del>	+	<del>7</del>	=	<del>8</del>
<del>3</del>	+	<del>5</del>	=	<del>8</del>
<del>4</del>	+	<del>3</del>	=	<del>7</del>