










# Je compte jusque 10





$1 + 2 =$   
 $6 \times 5 =$   
 $8 - 5 =$

**Calcule** les opérations suivantes.



$1 + 2 =$   
 $6 \times 5 =$   
 $8 - 5 =$

**Calcule** les opérations suivantes.





## Corrections

Le fichier **correction** est réservé au membre **ABO Pro** via notre site web.

Chemindesmaths.com

Je compte jusqu'à 10

Corrections

Calcule les opérations suivantes:

$7-3=4$   $4+4=8$   $6+3=9$   $9-5=4$

$6+5=10$   $8-2=6$   $6+1=7$

Calcule les opérations suivantes:

$1+2=3$   $3+2=5$   $5+2=7$   $8-5=3$

$10-3=7$   $6+3=9$   $1+3=4$   $2+4=6$

$5+2=7$   $1+5=6$   $2+3=5$   $1+3=4$