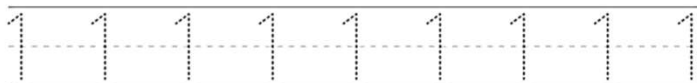
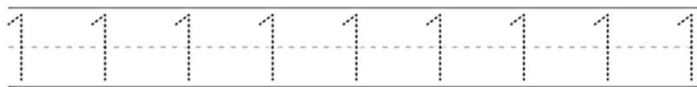
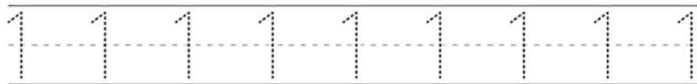
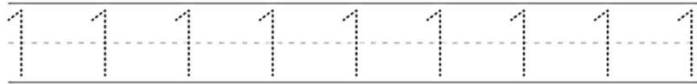


Le chiffre un.



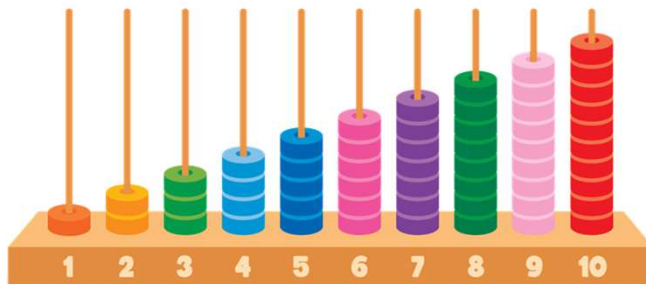
Recopie le chiffre 1 (un).



Colorie le 1.



Trouve le chiffre 1 et **entoure** le pion.



Le chiffre un.




Dessine pour faire 1 (un).

A large empty rounded rectangle with a small box containing the number '1' below it.


Below that, a rounded rectangle divided into two sections. The left section contains a red car and a plus sign '+'. The right section is empty. A small box containing the number '1' is below the right section.




Complète la maison de un.



Trouve le 1.



Le chiffre un.



Corrections

Le fichier **correction** est réservé au membre **ABO Pro** via notre site web.

Chemindesmaths.com

